
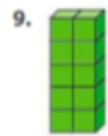


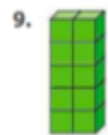



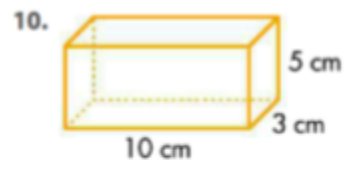
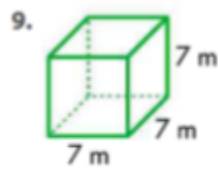
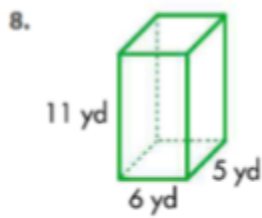
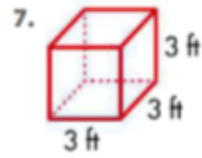
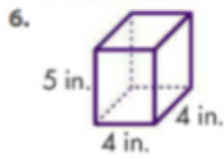
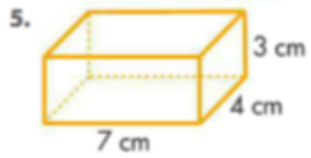
**Lesson 10-1: Model Volume
Independent Practice**



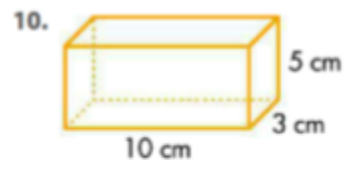
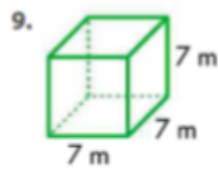
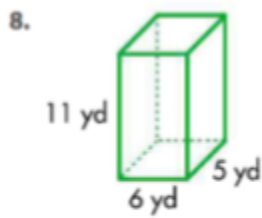
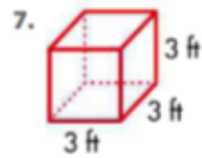
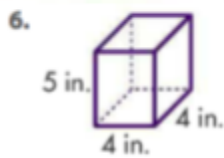
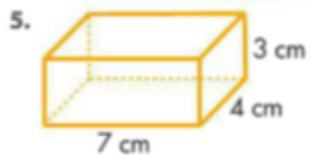
**Lesson 10-1: Model Volume
Independent Practice**



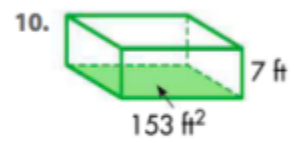
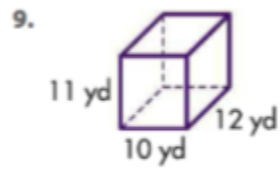
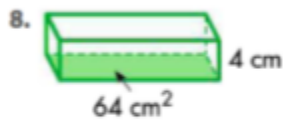
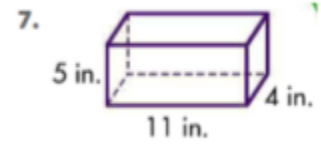
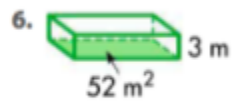
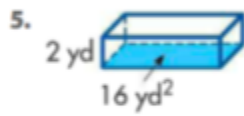
**Lesson 10-2: Develop a Volume Formula
Independent Practice**



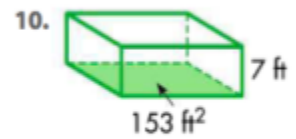
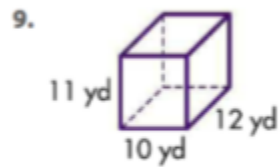
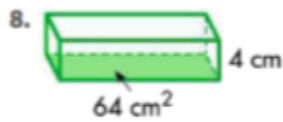
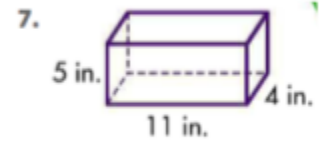
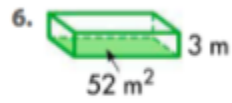
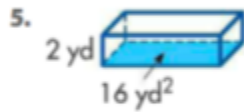
**Lesson 10-2: Develop a Volume Formula
Independent Practice**



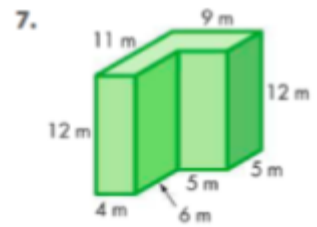
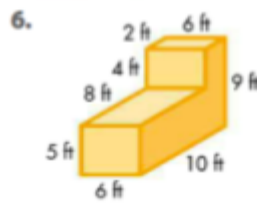
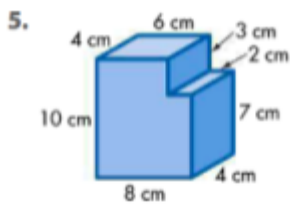
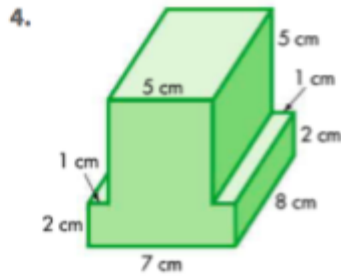
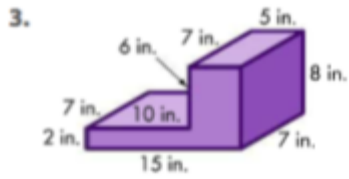
**Lesson 10-3: Volume of Prisms
Independent Practice**



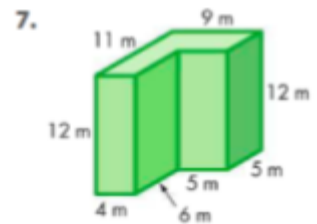
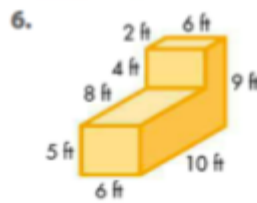
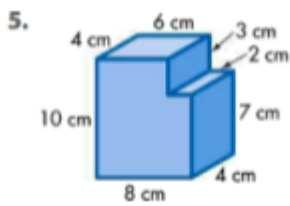
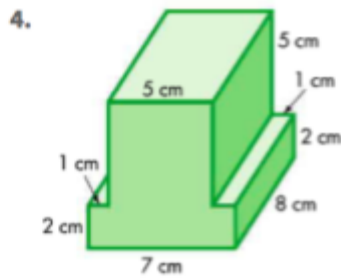
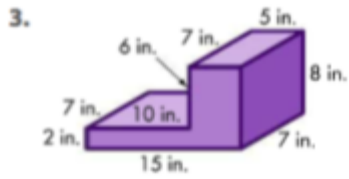
**Lesson 10-3: Volume of Prisms
Independent Practice**



Lesson 10-4: Combine Volumes of Prisms Independent Practice

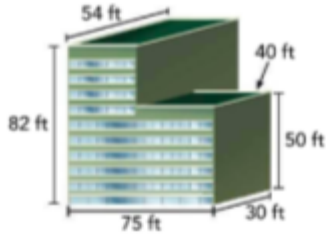


Lesson 10-4: Combine Volumes of Prisms Independent Practice



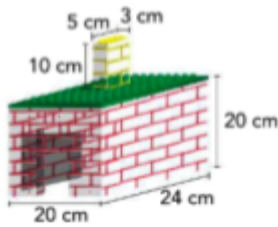
Lesson 10-5: Solve Word Problems Using Volume Independent Practice

4. Find the volume of the building below.

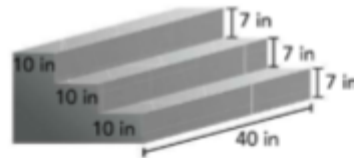


5. The nature center has a fish tank shaped like a rectangular prism that measures 6 feet long by 4 feet wide by 4 feet high. It can be stocked safely with 3 small fish in each cubic foot of water. How many small fish can safely fit in the tank?

6. Sophie built a house out of building blocks. Find the volume of the house Sophie built.

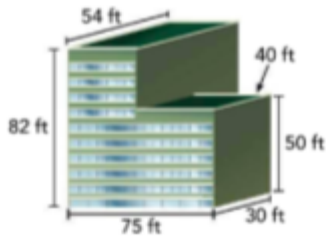


7. How many cubic inches of concrete would it take to make these stairs?



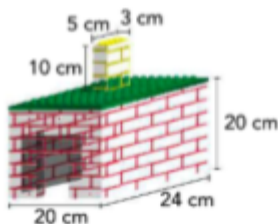
Lesson 10-5: Solve Word Problems Using Volume Independent Practice

4. Find the volume of the building below.



5. The nature center has a fish tank shaped like a rectangular prism that measures 6 feet long by 4 feet wide by 4 feet high. It can be stocked safely with 3 small fish in each cubic foot of water. How many small fish can safely fit in the tank?

6. Sophie built a house out of building blocks. Find the volume of the house Sophie built.



7. How many cubic inches of concrete would it take to make these stairs?

